

Reilly Math Challenge #15



First Name: _____ Last name: _____

Grade: _____ Homeroom: _____ Teacher: _____

Please complete as many as you can.

We encourage families and friends to work together and have fun with Math!

Kindergarten & 1st grade: Complete at least 2.

2nd & 3rd grade: Complete at least 4.


4th & 5th grade: Complete ALL items.

1. Which letter appears most often in the sentence below: a, e, or r ?

January 15th is National Strawberry Ice Cream Day!



+



= 10



= 4



= ?

3. Complete the pattern.



7, 14, _____, _____, 35, _____, _____, _____, _____, _____

4.

Use the numbers 1 to 9 in each square so that each row, column and diagonal has a sum of 15.

4		
	5	
2		

5. Find the value of each icon in the multiplication table.

			9
	35	49	
		70	
			900

				
<input type="text"/>	<input type="text"/>	<input type="text"/>	<input type="text"/>	<input type="text"/>
				
<input type="text"/>	<input type="text"/>	<input type="text"/>	<input type="text"/>	

6. Use $>$, $<$, or $=$ to make the statement true.

1.5 liters of ice cream

500 milliliters of ice cream